

You should be able to identify the organic molecules pictured as belonging to the following categories and subcategories: (also know whether each lipid or carbohydrate is primarily hydrophilic or hydrophobic)

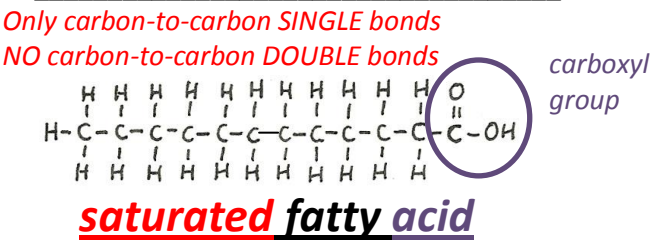
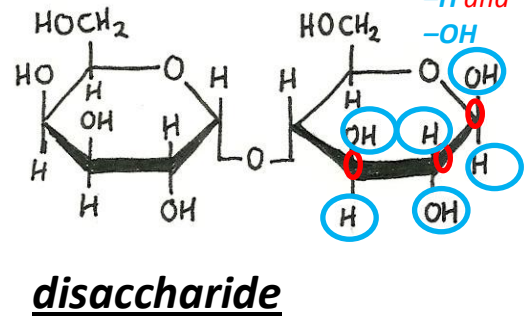
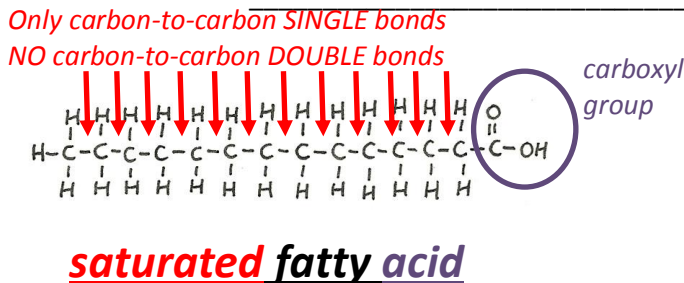
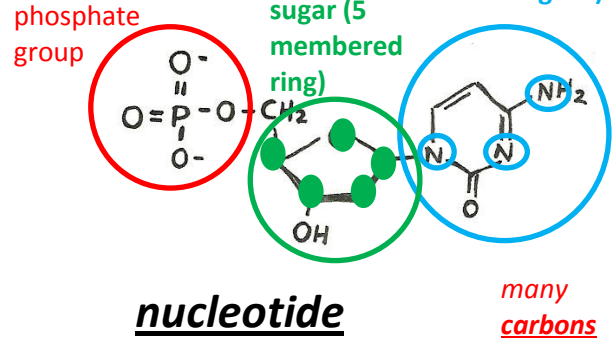
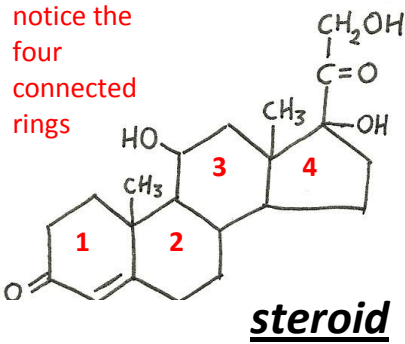
LIPIDS  
saturated fatty acid  
monounsaturated fatty acid  
polyunsaturated fatty acid  
phospholipid  
triglyceride  
steroid

CARBOHYDRATES  
monosaccharide  
disaccharide

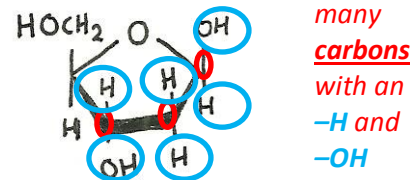
AMINO ACIDS

NUCLEOTIDES

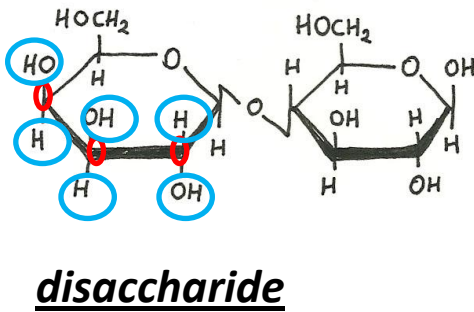
nitrogenous base  
(contains multiple nitrogens)



(two monosaccharides linked together)



many carbons with an -H and -OH



(two monosaccharides linked together)

